

Circle the greater number

22

42

What helped you decide?

tens

ones

Circle the greater number

46

64

What helped you decide?

tens

ones

Circle the greater number

88

86

What helped you decide?

tens

ones

Circle the greater number

92







29

What helped you decide?



tens

ones

Color the blocks to show numbers greater than 47



Color the heart to show numbers greater than 28



Count forward. What is the missing number?

110, 111, _____, 113, 114, 115

What is $5 + 7$?

- 8
- 9
- 11
- 12

Circle the number that is less

34

36

_____ is less than _____

_____ > _____

Circle the number that is less

75

57

_____ is less than _____

_____ > _____

Circle the number that is less

80

89

_____ is less than _____

_____ > _____

Circle the number that is less

13

31

_____ is less than _____

_____ > _____

Lori makes the number 74. Gabe makes a number that is less than 74. What could be a number Gabe makes?



Which number is less than 52?

25



52



64



88



Which number is less than 72?

100



81



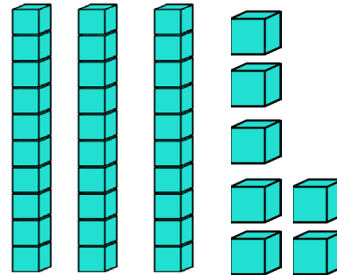
77



59



Which number does the model show?



29



30



37




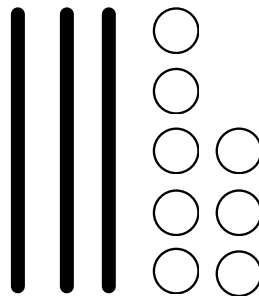
38



Count by tens. What number is missing?

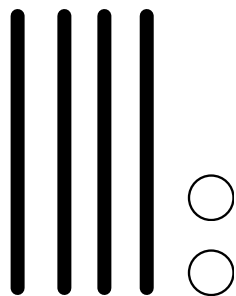
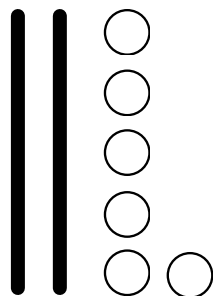
8, 18, 28, _____, _____, 58, 68

Write <, > or =



38 ○ 31

Write <, > or =



26 ○ 42

Write <, > or =

88 ○ 78

77 ○ 77

Write <, > or =

33 ○ 44

51 ○ 60

Write <, > or =

91 ○ 89

80 ○ 82

Write <, > or =

70 ○ 70

99 ○ 98

Write <, > or =

85 ○ 58

23 ○ 19

Write $<$, $>$ or $=$ to solve. Circle your answer.

Tracey has 26 pennies. Heba has 29 pennies. Who has a greater number of pennies?

Tracey

Heba

29 ○ 26

Circle the correct one.

$22 < 28$

$22 > 28$

$22 = 28$

$28 < 22$

Circle the correct one.


$78 > 87$

$78 = 87$

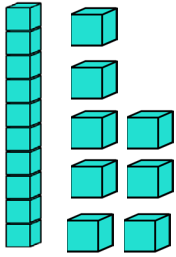
$87 > 78$

$87 < 78$

Which number does the model show?



Which shows the same number?



1 ten 2 ones

1 ten 3 ones

1 ten 5 ones

1 ten 8 ones

Ava has these number cards. She gives away cards with number less than 34 and greater than 38. Which number cards does Ava have now?

32

33

35

37

39

Ava has number cards _____.

Ron has these playing cards. He keeps the cards with numbers greater than 60 and less than 56. Circle the number cards Ron keeps.

54

57

58

59


61

Ron Keeps number cards _____.

Use mental math. Complete the chart

10 Less		10 More
	48	
	25	
	89	
8		
		47

Circle the set that has more.



Circle the set that has more.



Circle the set that has more.



Circle the set that has more.



Draw equal groups

Draw a ball for each glove.

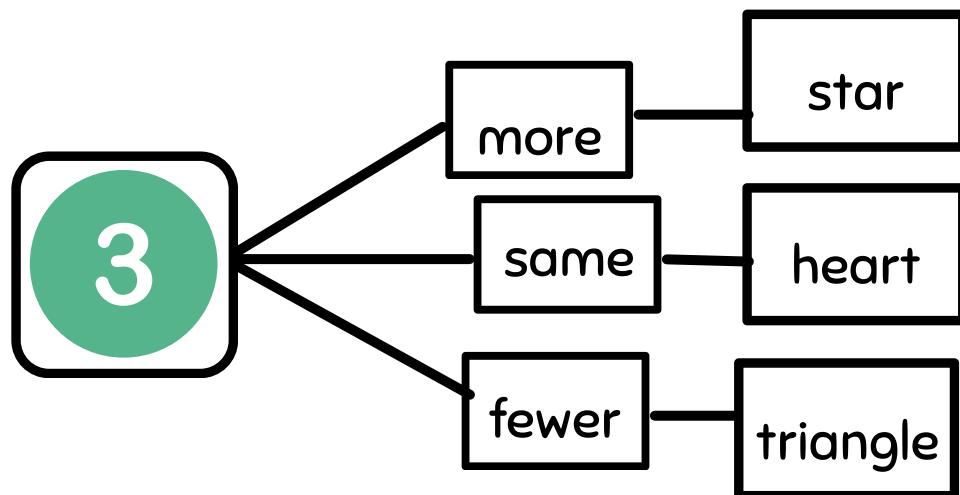


Draw equal groups

Draw a cookie for each plate..



Draw pictures on a piece of paper to show more, fewer, or the same number.



I see 2 white cats and 4 yellow cats. I see _____ yellow cats than white cats.

Dave has 9 grapes. Ann has 6 grapes.
Ann has _____ grapes than Dave.

5 ducks and 5 swans are at the pond.
There are the _____ number of
ducks and swans.

Circle the greater number.	Did ten or ones help you decide?	Write the numbers
62	tens	_____ is greater than _____
65	ones	_____ > _____
72	tens	_____ is greater than _____
70	ones	_____ > _____


Circle the greater number.	Did ten or ones help you decide?	Write the numbers
84	tens	_____ is greater than _____
48	ones	_____ > _____
32	tens	_____ is greater than _____
27	ones	_____ > _____

Circle the greater number.	Did ten or ones help you decide?	Write the numbers
57	tens	_____ is greater than _____
75	ones	_____ > _____
94	tens	_____ is greater than _____
98	ones	_____ > _____

Circle the greater number.	Did ten or ones help you decide?	Write the numbers
91	tens	_____ is greater than _____
19	ones	_____ > _____
68	tens	_____ is greater than _____
62	ones	_____ > _____

Circle the greater number.	Did ten or ones help you decide?	Write the numbers
88	tens	_____ is greater than _____
38	ones	_____ > _____
55	tens	_____ is greater than _____
52	ones	_____ > _____

Color the balloons that show numbers greater than 56.



Circle the number that is less	Did ten or ones help you decide?	Write the numbers
39	tens	_____ is less than _____
36	ones	_____ < _____
80	tens	_____ is less than _____
94	ones	_____ < _____

Compare the number to find which is less.



_____ is less than _____

_____ < _____

Circle the number that is less	Did ten or ones help you decide?	Write the numbers
39	tens	_____ is less than _____
36	ones	_____ < _____
80	tens	_____ is less than _____
94	ones	_____ < _____

Which number is greater than 67?

19
○

60
○

66
○

76
○

Circle the number that is less	Did ten or ones help you decide?	Write the numbers
96	tens	_____ is less than _____
90	ones	_____ < _____
23	tens	_____ is less than _____
32	ones	_____ < _____

Circle the number that is less	Did ten or ones help you decide?	Write the numbers
47	tens	_____ is less than _____
48	ones	_____ < _____
82	tens	_____ is less than _____
28	ones	_____ < _____

Circle the number that is less	Did ten or ones help you decide?	Write the numbers
65	tens	_____ is less than _____
55	ones	_____ < _____
79	tens	_____ is less than _____
80	ones	_____ < _____

Write <, > or =.

37 ○ 43

56 ○ 56

47 ○ 47

62 ○ 72

64 ○ 59

70 ○ 65

Write numbers to solve.

$96 = \underline{\quad}$

$40 < \underline{\quad}$

$53 > \underline{\quad}$

$71 > \underline{\quad}$

$83 < \underline{\quad}$

$29 = \underline{\quad}$

Which is true?

$21 > 28$

$21 = 28$

$21 < 28$

$28 < 21$

I have 89 rocks. I want to collect 10 more. How many rocks will I have then?

 rocks.

Use mental math. Complete the chart

10 Less		10 More
	39	
	75	
	64	
11		
		26

What number is 10 less than 76?


- 66 67 75 86

Margo has 28 stamps. Chet has 10 more stamps than Margo. Luis has 10 more stamps than Chet. How many stamps does Luis have?

_____ stamps.



Circle the set that has less.



FUN CARD!




Jump 3 times!

Give someone you love hugs. How many hugs? A number greater than 5.




Count and compare.

Use $<$, $>$ or $=$.






Count and compare.

Use $<$, $>$ or $=$.






Count and compare.

Use $<$, $>$ or $=$.




Count and compare.

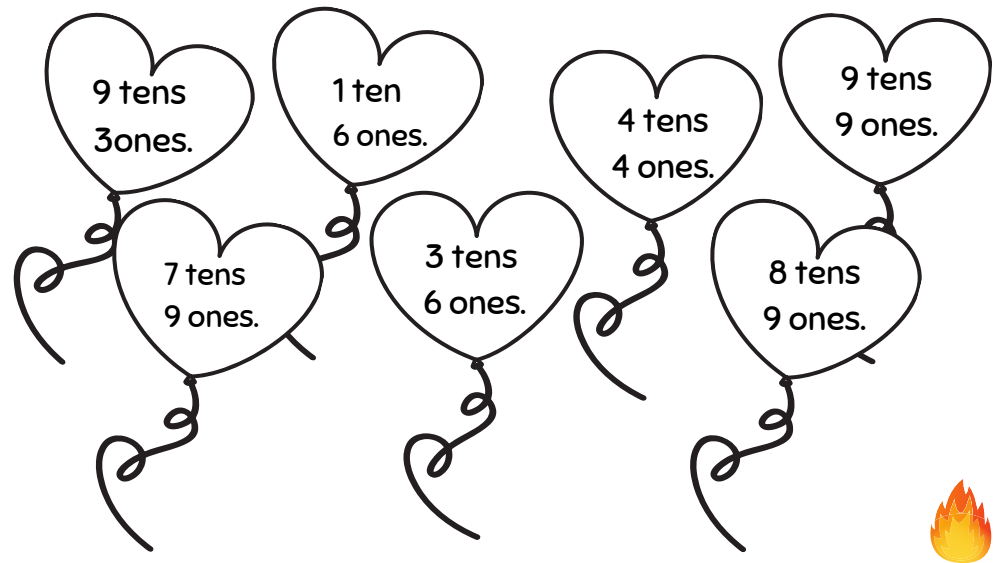
Use $<$, $>$ or $=$.



Color the spaces that show a number greater than 28.



Color the balloons that show numbers less than 88.



Mamae has 36 gumballs, Kelvin has 10 more than Mom, Bella has 10 more than Kelvin. How many gumball does Bella have?

Bella has _____ gumballs.

On a piece of paper draw a beautiful picture anyway you like, following those steps:

Flowers: greater than 3.



Hearts: less than 5.

Trees: less than 2

Apples: greater than 10

Fluffy clouds: greater than 1.

Circle the set that has less.



Circle the set that has less.





Circle the set that has more.



Circle the set that has more.





This PDF focuses on less than, greater than and equal.

I normally do 3 to 5 cards a day.

Bonus Activity:

Make a flash card using page 20 of this PDF

Each day, choose two numbers between 1 and 100. Use the flashcards with your child to compare the numbers

You may want to look for these books in the Library :

Just enough Carrots by Stuart J. Murphy.

More, Fewer, Less by Tana Hoban.